

Name : _____

T2S1

Area of a Rectangle

A) Find the area of each rectangle for the given measurements.

1) length = 156 in, width = 9 ft

Area = _____ ft²

2) width = 18 in, length = 1.92 ft

Area = _____ in²

3) width = 15 ft, length = 9 yd

Area = _____ yd²

4) length = 41 in, width = 0.67 yd

Area = _____ in²

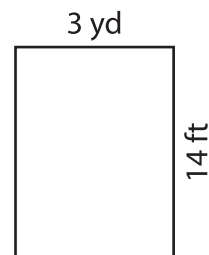
B) Find the area of each rectangle.

5)



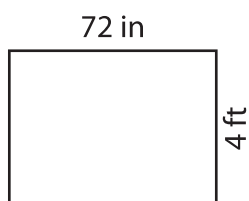
Area = _____ yd²

6)



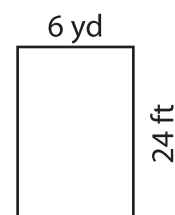
Area = _____ ft²

7)



Area = _____ ft²

8)



Area = _____ yd²

9) The length and width of a rectangle are 2.17 feet and 20 inches respectively. Determine the area of the rectangle.

_____ square inches