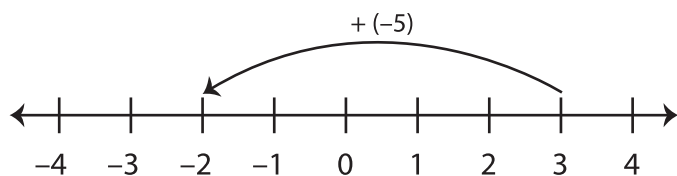


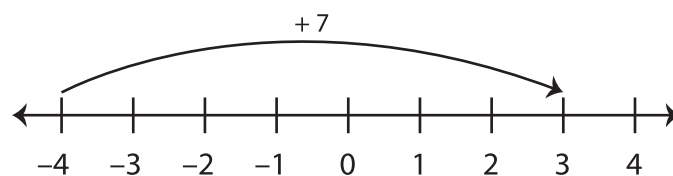
Number Line - Adding Integers

Sheet 3

Example 1: $3 + (-5) = -2$

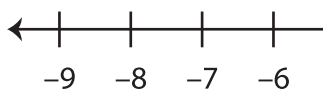


Example 2: $-4 + 7 = 3$

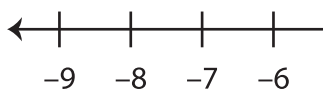


Use the number line to find the sum.

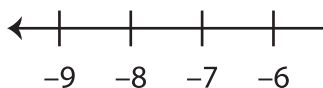
1) $0 + (-8) =$ _____



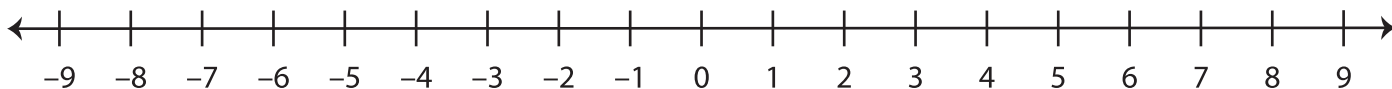
2) $5 + 4 =$ _____



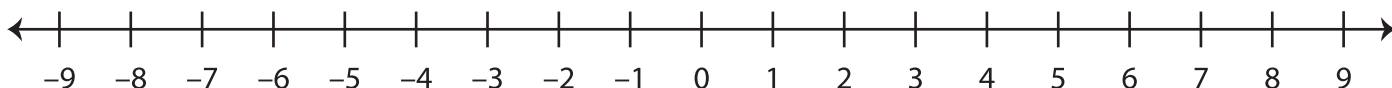
3) $7 + (-9) =$ _____



4) $-6 + 11 =$ _____



5) $-1 + (-6) =$ _____



PREVIEW

Gain complete access to the largest
collection of worksheets in all subjects!

Members, please
log in to
download this
worksheet.

Not a member?
Please sign up to
gain complete
access.

www.mathworksheets4kids.com