

Name : _____


Surface Area - Counting Squares

MS3

Find the surface area of each rectangular prism.

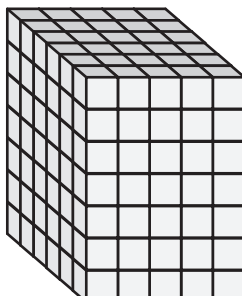
□ = 1 m²

1)

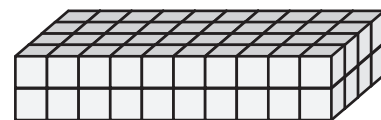


Surface Area = _____

2)

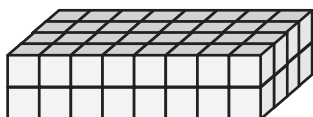


3)



Surface Area = _____

4)



Surface Area = _____

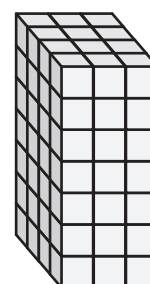
PREVIEW

Gain complete access to the largest collection of worksheets in all subjects!

Members, please log in to download this worksheet.

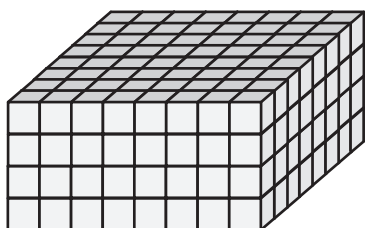
Not a member? Please sign up to gain complete access.

www.mathworksheets4kids.com




Surface Area = _____

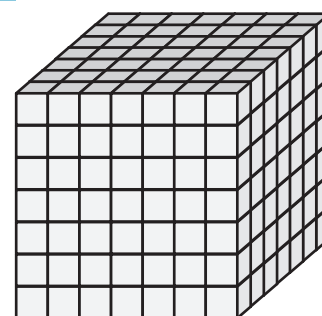
7)



Surface Area = _____



Surface Area = _____



Surface Area = _____