

Congruence Statements

A) Complete each congruence statement.

1) $\triangle UVW \cong \triangle FGH$

$\angle U \cong$ _____

2) $\triangle AOC \cong \triangle BOD$

$\overline{AC} \cong$ _____

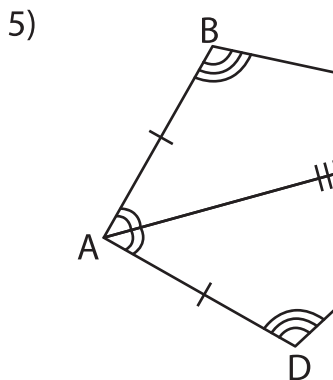
3) $\triangle WXY \cong \triangle YZW$

$\overline{ZW} \cong$ _____

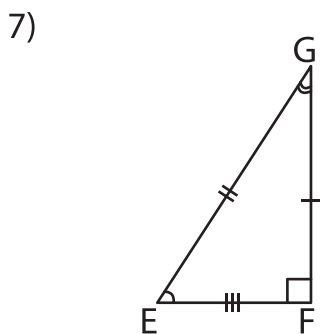
4) $\triangle SRU \cong \triangle RST$

$\angle U \cong$ _____

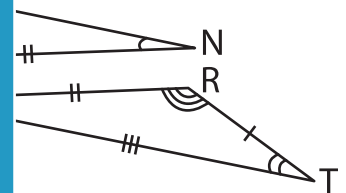
B) Complete each congruence statement.

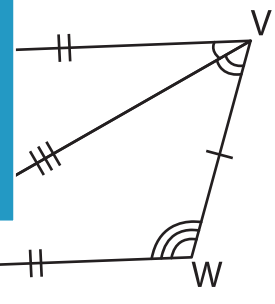


$\overline{BC} \cong$ _____



$\angle F \cong$ _____





$\overline{VU} \cong$ _____

9) If the triangles JKL and LMN are congruent, what is the corresponding part of $\angle L$?

PREVIEW

Gain complete access to the largest collection of worksheets in all subjects!

Members, please log in to download this worksheet.

Not a member? Please sign up to gain complete access.

www.mathworksheets4kids.com