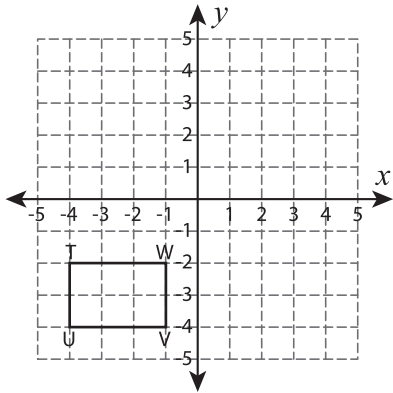


Write the New Coordinates

Graph the image of each figure after the given translation. Also write the coordinates of the image.

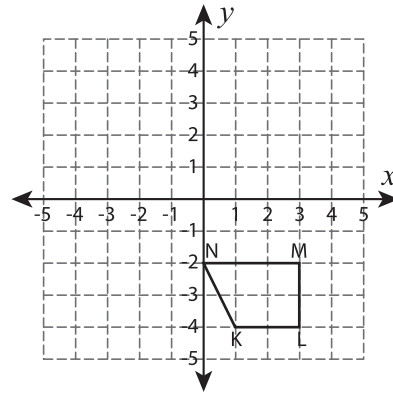
1) 5 units up and 2 units right



T': _____, U': _____

V': _____, W': _____

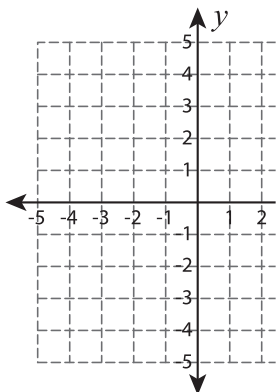
2) 4 units left and 4 units up



N': _____

L': _____

3) 7 units down and 1 unit right



A': _____, B': _____

C': _____

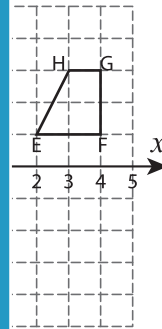
PREVIEW

Gain complete access to the largest collection of worksheets in all subjects!

Members, please log in to download this worksheet.

Not a member? Please sign up to gain complete access.

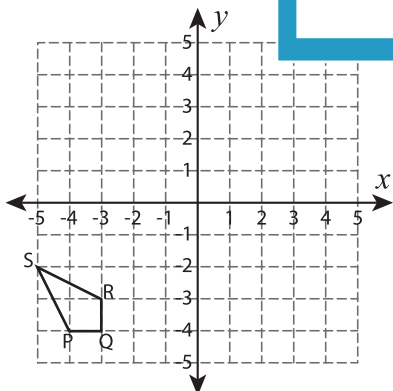
www.mathworksheets4kids.com



F': _____

G': _____

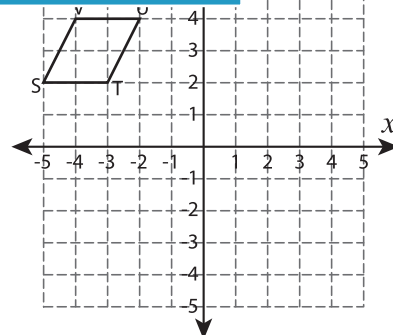
5) 8 units right and 6 units up



P': _____, Q': _____

R': _____, S': _____

7 units right



S': _____, T': _____

U': _____, V': _____