

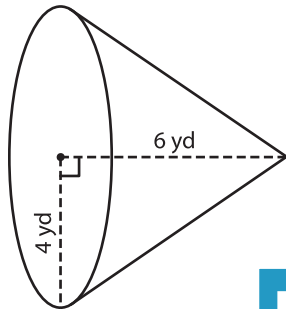
Name : \_\_\_\_\_

## Volume - Cone

Integers: ES6

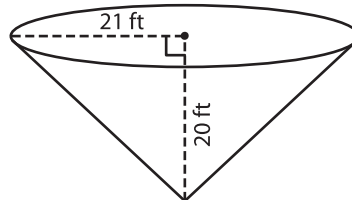
A) Find the volume of each cone. Round your answer to two decimal places.  
(use  $\pi = 3.14$ )

1)



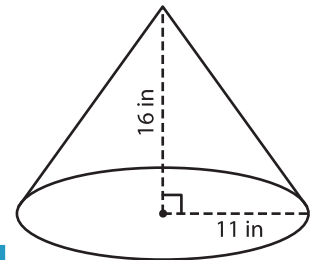
Volume = \_\_\_\_\_

2)



Volume = \_\_\_\_\_

3)



Volume = \_\_\_\_\_

B) Find the volume of each cone. Round your answer to two decimal places.

4) height = 22 ft ; radius = 10 ft

Volume = \_\_\_\_\_

6) radius = 30 in ; height = 12 in

Volume = \_\_\_\_\_

Volume = \_\_\_\_\_

8) Eliza rolls a paper in the shape of a cone. If the height and radius of the cone are 5 inches and 1 inch respectively, find the volume of the paper cone. Round your answer to two decimal places. (use  $\pi = 3.14$ )

\_\_\_\_\_

**PREVIEW**

Gain complete access to the largest collection of worksheets in all subjects!

Members, please log in to download this worksheet.

Not a member? Please sign up to gain complete access.

[www.mathworksheets4kids.com](http://www.mathworksheets4kids.com)