

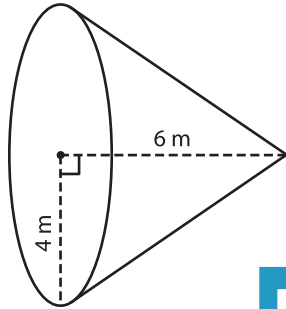
Name : _____

Volume - Cone

Integers: ES6

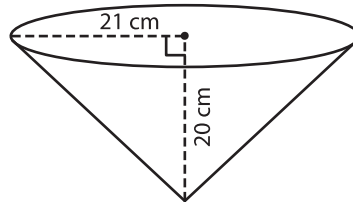
A) Find the volume of each cone. Round your answer to two decimal places.
(use $\pi = 3.14$)

1)



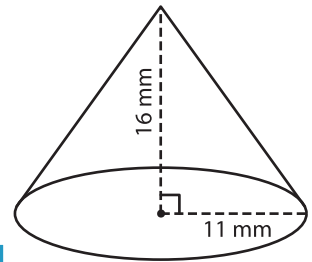
Volume = _____

2)



Volume = _____

3)



Volume = _____

B) Find the volume of each cone. Round your answer to two decimal places.

4) height = 22 cm ; radius = 15 cm

Volume = _____

6) radius = 30 mm ; height = 10 mm

Volume = _____

PREVIEW

Gain complete access to the largest
collection of worksheets in all subjects!

Members, please
log in to
download this
worksheet.

Not a member?
Please sign up to
gain complete
access.

www.mathworksheets4kids.com

Volume = _____

8) Eliza rolls a paper in the shape of a cone. If the height and radius of the cone are 11 cm and 2 cm respectively, find the volume of the paper cone. Round your answer to two decimal places. (use $\pi = 3.14$)
