
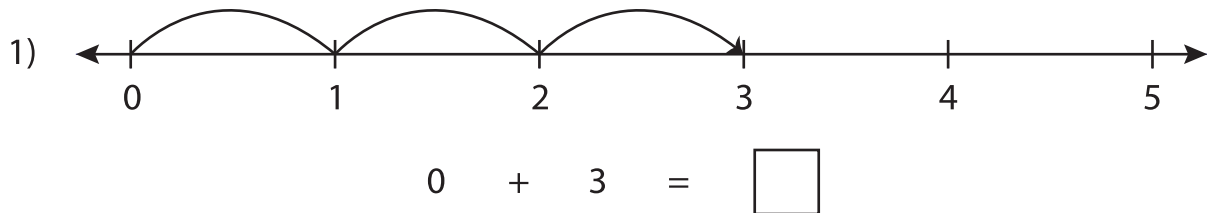


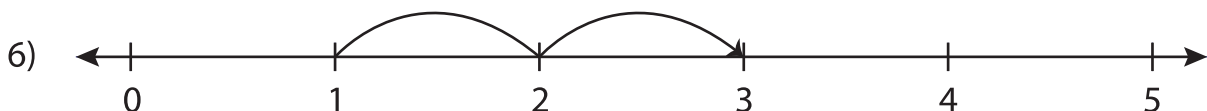
Number Line Addition

0-5: S1

Read each number line and solve the problem.



$$4 + 1 = \square$$



$$1 + 2 = \square$$

PREVIEW

Gain complete access to the largest collection of worksheets in all subjects!

Members, please log in to download this worksheet.

Not a member? Please sign up to gain complete access.

www.mathworksheets4kids.com