




Bundles of Tens and Ones

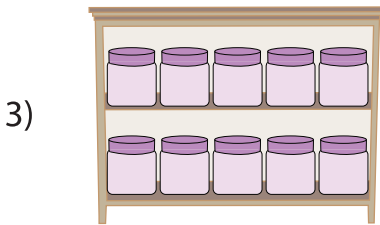
A) Count the number of objects in each set, and write how many in all.



1 ten + _____ ones = _____



1 ten + _____ ones = _____



PREVIEW

Gain complete access to the largest collection of worksheets in all subjects!

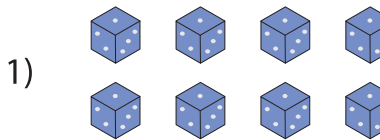
Members, please log in to download this worksheet.

Not a member? Please sign up to gain complete access.

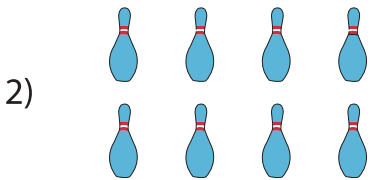
www.mathworksheets4kids.com

_____ ones = _____


B) Circle a group of ten



_____ ten + _____ ones



_____ = _____ ten + _____ ones



_____ = _____ ten + _____ ones