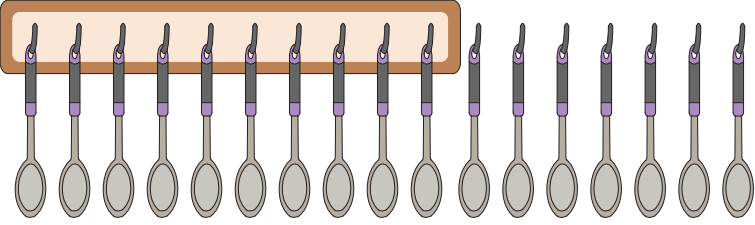
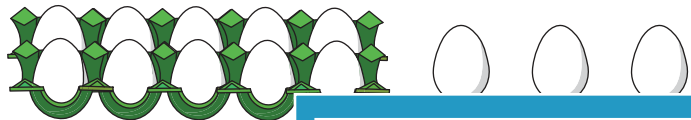


Bundles of Tens and Ones

A) Count the number of objects in each set, and write how many in all.

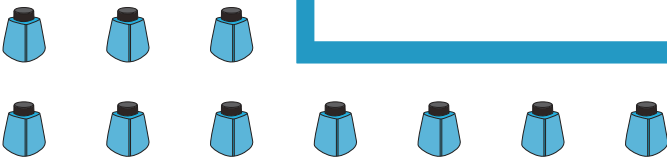
1)  1 ten + _____ ones = _____


2)  1 ten + _____ ones = _____

3)  _____ ones = _____

B) Circle a group of ten

1)  _____ ten + _____ ones

2)  _____ = _____ ten + _____ ones

3)  _____ = _____ ten + _____ ones

PREVIEW

Gain complete access to the largest collection of worksheets in all subjects!

Members, please log in to download this worksheet.

Not a member? Please sign up to gain complete access.

www.mathworksheets4kids.com